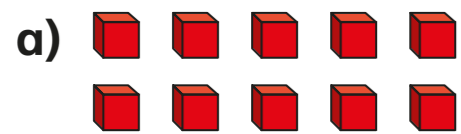


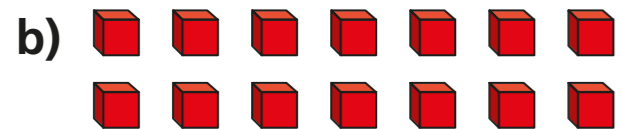
# Add 2-digit numbers (2)



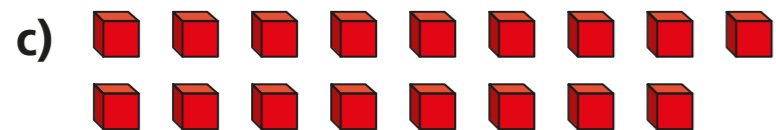
1 Count the ones and complete the sentences.



ones =  ten

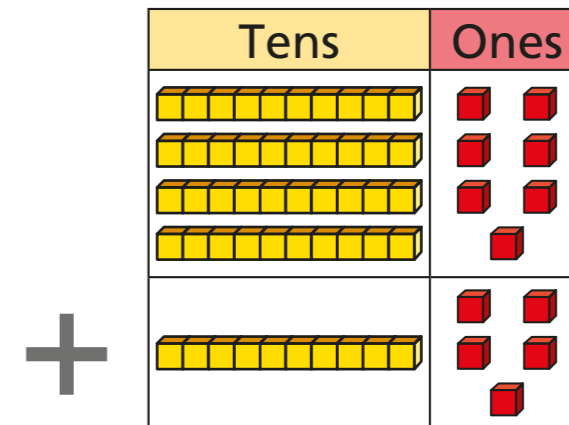


ones =  ten and  ones



ones =  ten and  ones

2 Complete the additions.



ones +  ones =  ones

ones =  ten +  ones

tens +  tens =  tens

+  =



•	•	<input type="checkbox"/>	••	•	<input type="checkbox"/>
		<input type="checkbox"/>			<input type="checkbox"/>
•	••	<input type="checkbox"/>	••		<input type="checkbox"/>
		<input type="checkbox"/>			<input type="checkbox"/>
•	••	<input type="checkbox"/>	•	••	<input type="checkbox"/>

•

		•	•	
		_____		
		•		
		_____		

<input type="checkbox"/>	<input type="checkbox"/>	<input type="checkbox"/>
--------------------------	--------------------------	--------------------------

• • -

€

• •

